

KS1 Maths Quiz - Year 1 Shapes - 2D (Questions)

This quiz addresses the requirements of the National Curriculum KS1 in Maths and Numeracy for children aged 5 and 6 in year 1. Specifically this quiz is aimed at the section dealing with recognising and naming common 2-D shapes.

Year 1 children will learn to recognise and name basic and common 2-D shapes such as squares, circles and triangles. They will use 2-dimensional shapes to make repeating patterns and, as these shapes are common to the real world, the children will be encouraged to spot and recognise them and also to correctly name them.

1. These people are standing in a...



- Triangle
- Square
- Circle
- Oblong

2. This pattern is made up of...



- Squares
- Circles
- Oblongs
- Triangles

3. What shape is around these snooker balls?



- A circle
- A square
- A triangle
- An oblong

4. A square could also be called a...



- Triangle
- Circle
- Oblong
- Rectangle

5. This is a pattern made of...



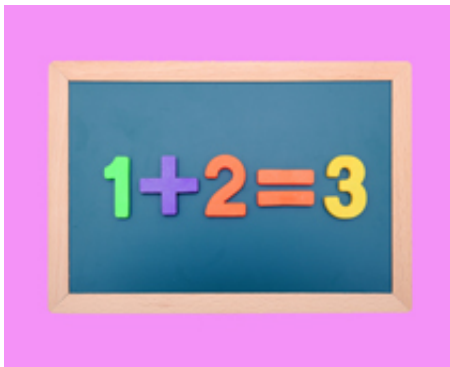
- Circles
- Oblongs
- Squares
- Triangles

6. What shape is this person making with their hands?




- Triangle
- Square
- Circle
- Oblong

7. The board is a...




- Rectangle
- Square
- Triangle
- Circle

8. What shape is the clock?



- A circle
- A triangle
- An oblong
- A square

9. These bricks are all..



- Circles
- Triangles
- Squares
- Oblongs

10. What shape makes up this pattern?



- Square
- Triangle
- Oblong
- Circle

KS1 Maths Quiz - Year 1 Shapes - 2D (Answers)

1. These people are standing in a...



- Triangle
- Square
- Circle
- Oblong

They are making a round shape - a circle

2. This pattern is made up of...



- Squares
- Circles
- Oblongs
- Triangles

There are rows of squares in this pattern

3. What shape is around these snooker balls?



- A circle
- A square
- A triangle
- An oblong

It's a triangular frame

4. A square could also be called a...



- Triangle
- Circle
- Oblong
- Rectangle

Rectangles must have 4 sides, four 90 degree angles and two pairs of parallel sides

5. This is a pattern made of...



- Circles
- Oblongs
- Squares
- Triangles

There are rows and rows of squares in the pattern

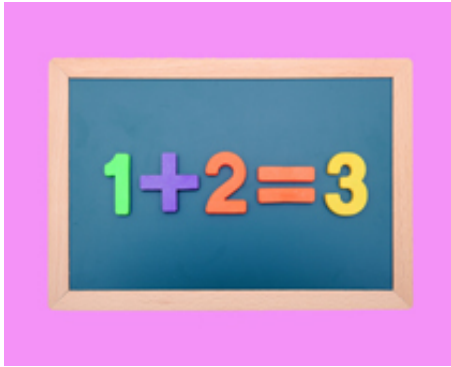
6. What shape is this person making with their hands?



- Triangle
- Square
- Circle
- Oblong

They are making the three sides of a triangle


7. The board is a...



- Rectangle
- Square
- Triangle
- Circle

The board is rectangular and also an oblong

8. What shape is the clock?



- A circle
- A triangle
- An oblong
- A square

It has four equal sides

9. These bricks are all..



- Circles
- Triangles
- Squares
- Oblongs

The oblongs are making a herringbone pattern

10. What shape makes up this pattern?



- Square
- Triangle
- Oblong
- Circle

They are large and small triangles